



K. P. C. PUBLIC SCHOOL

KHARGHAR

Time: 2 Hrs.

Name _____

Year: 23 - 24

Std: _____

Exam : _____

Date: _____

Subject : _____

Roll no: _____

Marks : _____

Class teacher sign: _____

Oral : _____

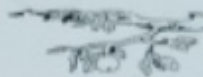
Written _____

Total : _____

Q.1) Look at the pictures and fill in the blanks:

[5M]

1) There are _____ birds on the branch [zero/two].




2) The cat is sitting _____ the bench [on/under]



3) The ball is _____ [smaller/bigger]



4) A rectangle has _____ sides.



5) A circle have _____ corner.



Q.2) Write the number that comes.

[6M]

Before

After

Between

6

1

7 9

9

5



5 7

Q.3) Write the numbers in correct circles:

[2M]

A) 1 5 4

b) 5 6 3



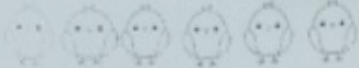

Smallest



Biggest



Smallest


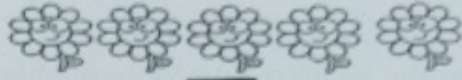
Biggest

Q.4] Count and write the numbers. Write $>$, $<$ or $=$ in the \bigcirc

1)   \bigcirc

2)   \bigcirc

3)   \bigcirc






4)   \bigcirc

Q.5] Write the number and ascending and descending order:




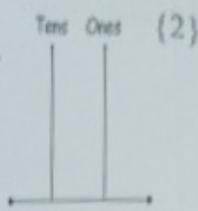

[5M]

| | ASCENDING | DESCENDING |
|-------------------------|-----------|------------|
| Six, five, three, four | | |
| One, zero, Five, nine | | |
| Nine, eight, four, one | | |
| four, seven, nine, zero | | |
| six, one, two, nine | | |

Q.6] This is a students race .Mark the position of the students in the blank boxes. [5M]

 Mary  Anne  Sue  Tara  Sara

Look at the pictures. Draw the number of beads on the abacus. Also write the number names in the boxes. [3M]



Q. Complete the table: [5M]

| Shapes | Sides | Corner |
|-----------|-------|--------|
| Square | | |
| Rectangle | | |
| Circle | | |
| Triangle | | |
| Oval | | |

Q.9] Write numbers name of the following: [5M]

2 = _____

4 = _____

3 = _____

8 = _____

9 = _____